


# Counting pennies, nickels, dimes & quarters

## Grade 1 Counting Money Worksheet


Add the coins.




# Counting pennies, nickels, dimes & quarters

## Grade 1 Counting Money Worksheet

Add the coins.

1)  = 27¢ \_\_\_\_\_

2)  = 31¢ \_\_\_\_\_

3)  = 62¢ \_\_\_\_\_

4)  = 47¢ \_\_\_\_\_

5)  = 13¢ \_\_\_\_\_

6)  = 37¢ \_\_\_\_\_