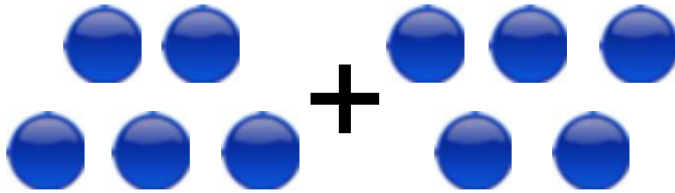



Adding using pictures

Grade 1 Addition Worksheet

Count/draw the circles, write/read the numbers and find the sum.




$$\underline{\quad} + \underline{\quad} = \underline{\quad}$$



$$\underline{\quad} + \underline{\quad} = \underline{\quad}$$

+

$$3 + 3 = \underline{\quad}$$



$$\underline{\quad} + \underline{\quad} = \underline{\quad}$$

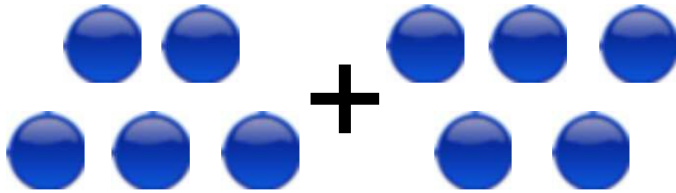
+

$$1 + 1 = \underline{\quad}$$


Adding using pictures

Grade 1 Addition Worksheet

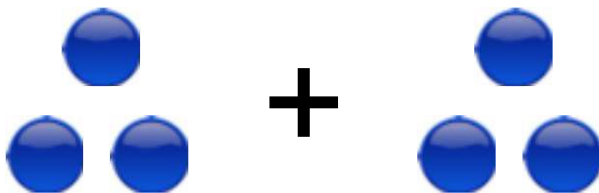
Count/draw the circles, write/read the numbers and find the sum.




$$5 + 5 = 10$$



$$4 + 4 = 8$$



$$3 + 3 = 6$$



$$2 + 2 = 4$$



$$1 + 1 = 2$$