



Adding using pictures

Grade 1 Addition Worksheet

Count/draw the circles, write/read the numbers and find the sum.



$$\underline{\quad} + \underline{\quad} = \underline{\quad}$$



$$\underline{\quad} + \underline{\quad} = \underline{\quad}$$

+

$$0 + 4 = \underline{\quad}$$



$$\underline{\quad} + \underline{\quad} = \underline{\quad}$$

+

$$3 + 4 = \underline{\quad}$$

Adding using pictures

Grade 1 Addition Worksheet


Count/draw the circles, write/read the numbers and find the sum.


$$1 + 3 = 4$$


$$2 + 2 = 4$$


$$0 + 4 = 4$$


$$4 + 3 = 7$$


$$3 + 4 = 7$$