


## Adding with objects

### Grade 1 Addition Worksheet

Count / draw circles, read / write numbers and find the sums.



$$\underline{\quad} + \underline{\quad} = \underline{\quad}$$


$$\underline{\quad} + \underline{\quad} = \underline{\quad}$$

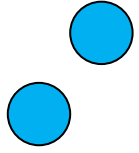
$$2 + 1 = \underline{\quad}$$

$$2 + 4 = \underline{\quad}$$

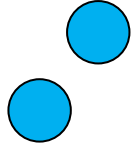
$$2 + 6 = \underline{\quad}$$


$$\underline{\quad} + \underline{\quad} = \underline{\quad}$$

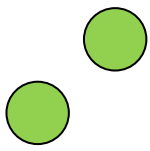
## Answers



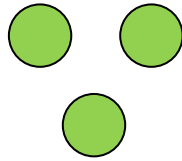
+



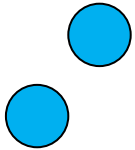
$$2 + 2 = 4$$



+



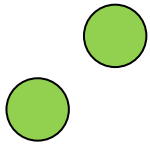
$$2 + 3 = 5$$



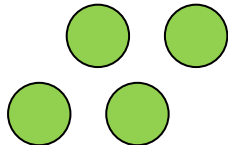
+



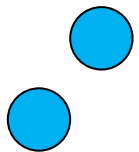
$$2 + 1 = 3$$



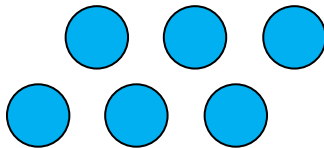
+



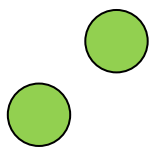
$$2 + 4 = 6$$



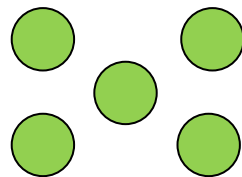
+



$$2 + 6 = 8$$



+



$$2 + 5 = 7$$