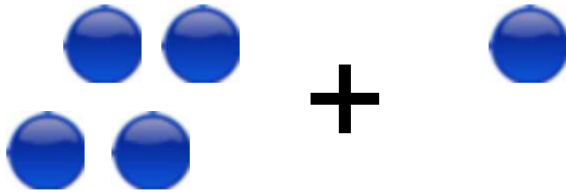



Adding using pictures

Grade 1 Addition Worksheet

Count/draw the circles, write/read the numbers and find the sum.




$$\underline{\quad} + \underline{\quad} = \underline{\quad}$$



$$\underline{\quad} + \underline{\quad} = \underline{\quad}$$

+

$$5 + 1 = \underline{\quad}$$



$$\underline{\quad} + \underline{\quad} = \underline{\quad}$$


+

$$1 + 5 = \underline{\quad}$$

Adding using pictures

Grade 1 Addition Worksheet


Count/draw the circles, write/read the numbers and find the sum.



+




$$4 + 1 = 5$$



+


$$1 + 4 = 5$$



+




$$5 + 1 = 6$$



+



$$5 + 4 = 9$$



+

$$1 + 5 = 6$$