



Adding using pictures

Grade 1 Addition Worksheet

Count/draw the circles, write/read the numbers and find the sum.



$$\underline{\quad} + \underline{\quad} = \underline{\quad}$$



$$\underline{\quad} + \underline{\quad} = \underline{\quad}$$

+

$$2 + 2 = \underline{\quad}$$



$$\underline{\quad} + \underline{\quad} = \underline{\quad}$$


+

$$5 + 5 = \underline{\quad}$$


Adding using pictures

Grade 1 Addition Worksheet

Count/draw the circles, write/read the numbers and find the sum.




$$4 + 4 = 8$$



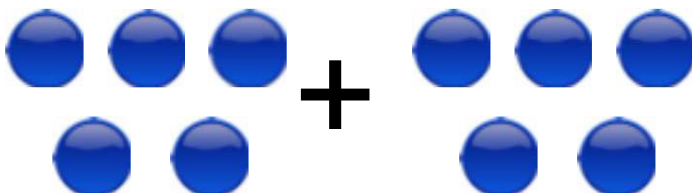
$$3 + 3 = 6$$



$$2 + 2 = 4$$



$$3 + 3 = 6$$



$$5 + 5 = 10$$