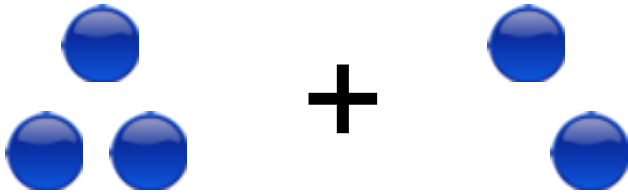


Adding using pictures


Grade 1 Addition Worksheet

Count/draw the circles, write/read the numbers and find the sum.



+

$$\underline{\quad} + \underline{\quad} = \underline{\quad}$$




+

$$\underline{\quad} + \underline{\quad} = \underline{\quad}$$

+

$$4 + 2 = \underline{\quad}$$



+

$$\underline{\quad} + \underline{\quad} = \underline{\quad}$$

+

$$3 + 5 = \underline{\quad}$$