


Cupcakes pictograph

Data and Graphing Worksheet

Kathy baked cupcakes from Monday to Friday for her friends.
Use the information to answer the questions.

Number of cupcakes









 = 1 cupcake

- How many cupcakes did Kathy bake on Friday? _____
- On what day did she bake 7 cupcakes? _____
- On what day did she bake the fewest cupcakes? _____
- On what day did she bake the most cupcakes? _____
- How many cupcakes did she bake on Thursday and Friday together? _____

Answers

Number of cupcakes

Monday	
Tuesday	
Wednesday	
Thursday	
Friday	

 = 1 cupcake

- How many cupcakes did Kathy bake on Friday? 5
- On what day did she bake 7 cupcakes? Thursday
- On what day did she bake the fewest cupcakes? Wednesday
- On what day did she bake the most cupcakes? Tuesday
- How many cupcakes did she bake on Thursday and Friday? 12