





















Hotdogs pictograph

Data and Graphing Worksheet

Four friends prepared hotdogs for their picnic day.

Number of hotdogs




















Tim								
Jane								
Mae								
Ben								


 = 1 hotdog

- Who prepared five hotdogs? _____
- Who prepared the most hotdogs? _____
- How many hotdogs did Ben prepare? _____
- Which 2 friends prepared the same number of hotdogs? _____
- How many hotdogs were prepared by Mae and Ben? _____

Answers

Number of hotdogs

Tim								
Jane								
Mae								
Ben								

 = 1 hotdog

Who prepared five hotdogs?

Jane

Who prepared the most hotdogs?

Mae

How many hotdogs did Ben prepare?

3

Who among of them prepared the same number of hotdogs?

Tim and Ben

How many hotdogs were prepared by Mae and Ben?

11