

Counting objects (up to 30)


Grade 1 Counting Worksheet

Count the objects and write the total.

1)  = _____

2)  = _____

3)  = _____

4)  = _____

5)  = _____

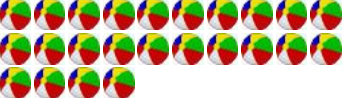
6)  = _____


7)  = _____


8)  = _____

9)  = _____

10)  = _____

11)  = _____

12)  = _____

13)  = _____

14)  = _____

Counting objects (up to 30)


Grade 1 Counting Worksheet

Count the objects and write the total.

1)  = 4

2)  = 18

3)  = 8

4)  = 21

5)  = 14

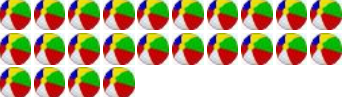
6)  = 3


7)  = 16

8)  = 20

9)  = 28

10)  = 23

11)  = 24

12)  = 11

13)  = 5

14)  = 6