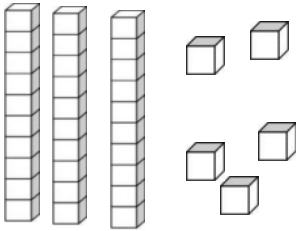


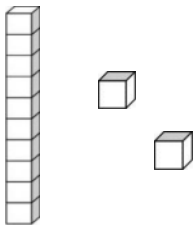
Counting tens and ones

Grade 1 Base Ten Blocks Worksheet

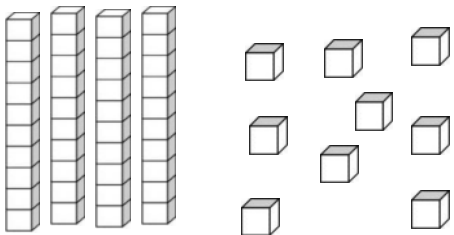
Find the total number of blocks.



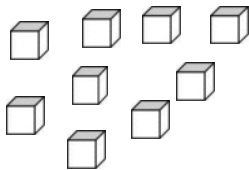
$$= \underline{3} \text{ tens} + \underline{5} \text{ ones} = \underline{35}$$



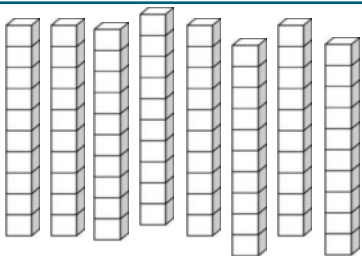
$$= \underline{\quad} \text{ tens} + \underline{\quad} \text{ ones} = \underline{\quad}$$



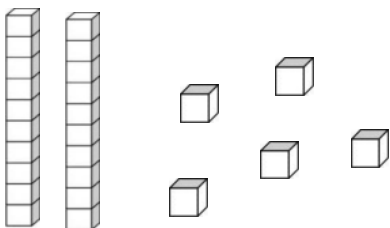
$$= \underline{\quad} \text{ tens} + \underline{\quad} \text{ ones} = \underline{\quad}$$



$$= \underline{\quad} \text{ tens} + \underline{\quad} \text{ ones} = \underline{\quad}$$



$$= \underline{\quad} \text{ tens} + \underline{\quad} \text{ ones} = \underline{\quad}$$



$$= \underline{\quad} \text{ tens} + \underline{\quad} \text{ ones} = \underline{\quad}$$