



# Subtracting objects

## Kindergarten Subtraction Worksheet


Circle the objects being taken away. How many are left?


1. 
$$\begin{array}{r} 8 \\ - 3 \\ \hline 5 \end{array}$$


2. 
$$\begin{array}{r} 5 \\ - 1 \\ \hline \end{array}$$


3. 
$$\begin{array}{r} 5 \\ - 0 \\ \hline \end{array}$$


4. 
$$\begin{array}{r} 4 \\ - 4 \\ \hline \end{array}$$


5. 
$$\begin{array}{r} 5 \\ - 2 \\ \hline \end{array}$$


6. 
$$\begin{array}{r} 3 \\ - 2 \\ \hline \end{array}$$


7. 
$$\begin{array}{r} 6 \\ - 2 \\ \hline \end{array}$$


8. 
$$\begin{array}{r} 3 \\ - 1 \\ \hline \end{array}$$


## Answers

1. 5

2. 4

3. 5

4. 0

5. 3

6. 1

7. 4

8. 2