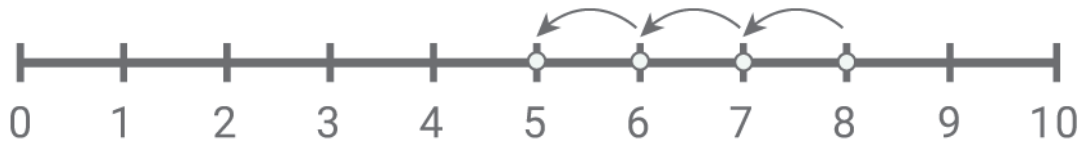


Subtract with number lines

Kindergarten Subtraction Worksheet

Draw the subtraction hops. Write the missing number.



$$8 - \square = 5$$



$$4 - \square = 2$$



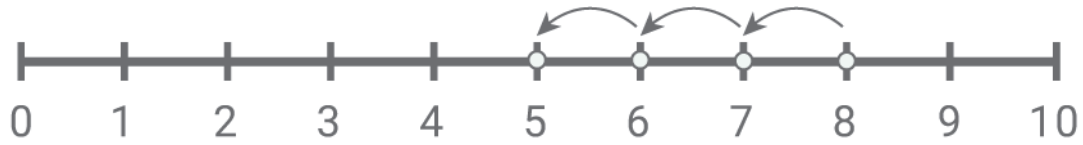
$$10 - \square = 3$$



$$6 - \square = 1$$

Subtract with number lines

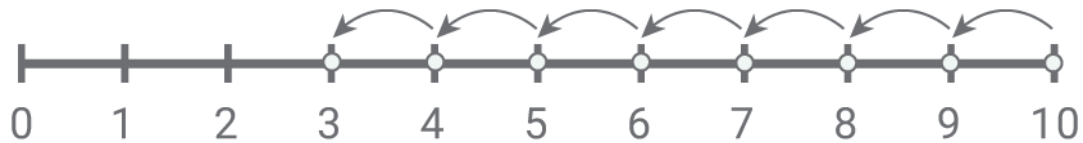
Answers:



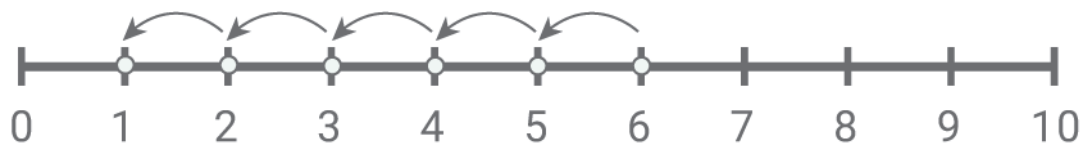
$$8 - \boxed{3} = 5$$



$$4 - \boxed{2} = 2$$



$$10 - \boxed{7} = 3$$



$$6 - \boxed{5} = 1$$