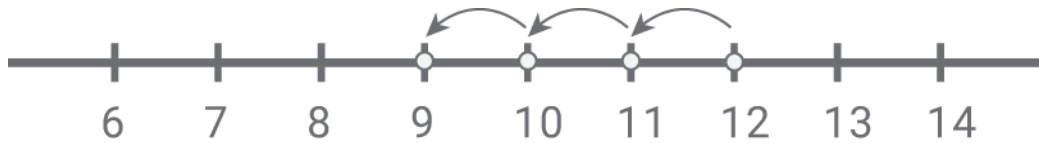


## Subtract with number lines

Kindergarten Subtraction Worksheet

Draw the subtraction hops. Write the difference.



$$12 - 3 = \square$$



$$20 - 6 = \square$$



$$15 - 5 = \square$$

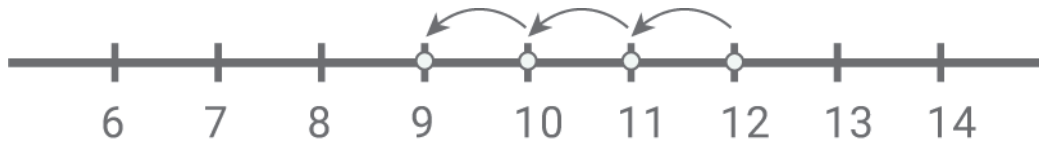


$$8 - 3 = \square$$

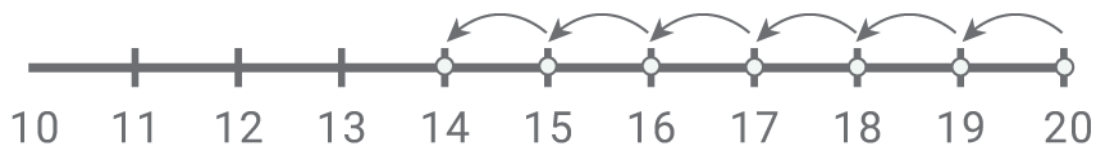
## Subtract with number lines

---

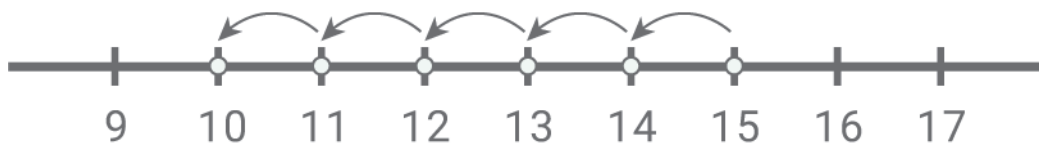
Answers:



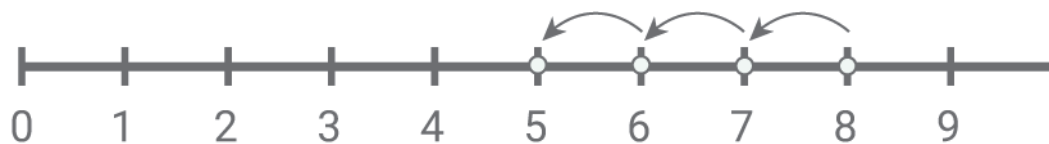
$$12 - 3 = \boxed{9}$$



$$20 - 6 = \boxed{14}$$



$$15 - 5 = \boxed{10}$$



$$8 - 3 = \boxed{5}$$