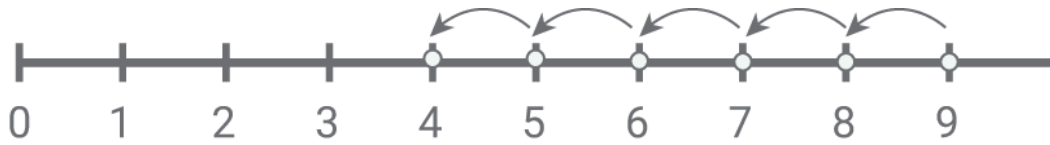


Subtract with number lines

Kindergarten Subtraction Worksheet

Draw the subtraction hops. Write the difference.



$$9 - 5 = \square$$



$$7 - 4 = \square$$



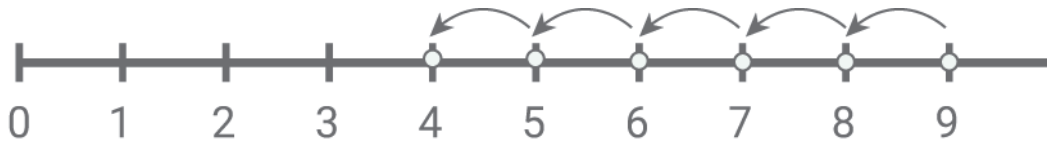
$$6 - 2 = \square$$



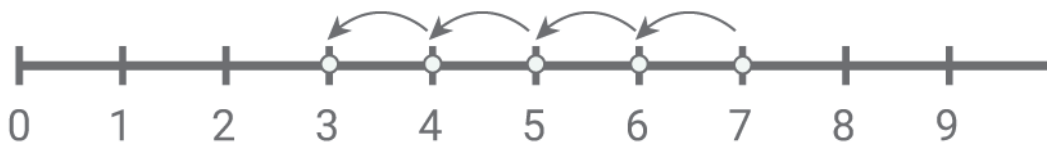
$$8 - 3 = \square$$

Subtract with number lines

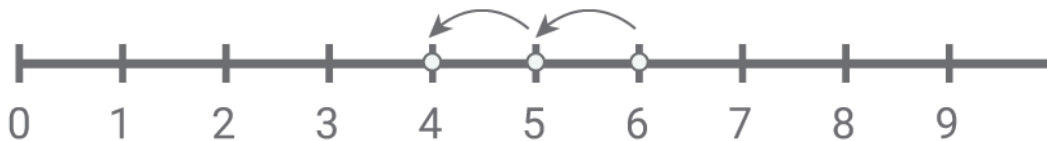
Answers:



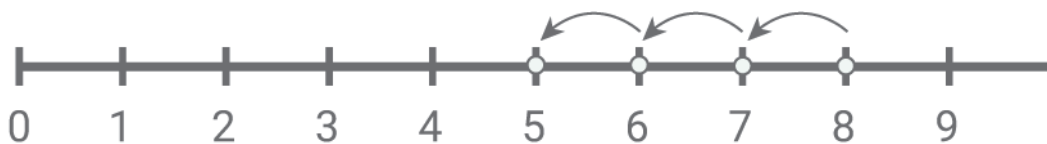
$$9 - 5 = \boxed{4}$$



$$7 - 4 = \boxed{3}$$



$$6 - 2 = \boxed{4}$$



$$8 - 3 = \boxed{5}$$