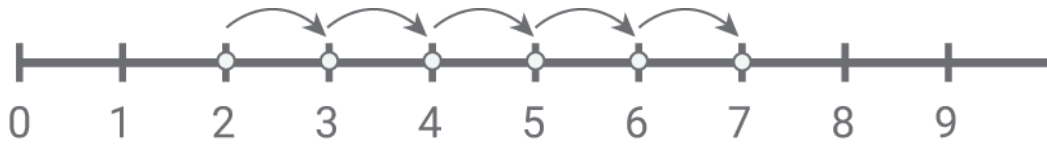


Adding with number lines

Kindergarten Addition Worksheet

Draw the addition hops. Write the sum.



$$2 + 5 = \square$$



$$3 + 3 = \square$$



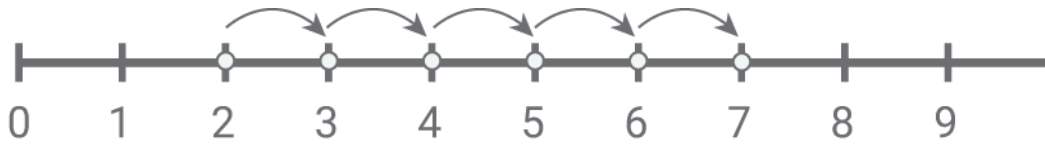
$$1 + 7 = \square$$



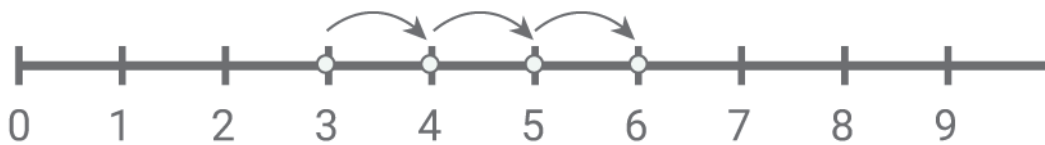
$$4 + 5 = \square$$

Adding with number lines

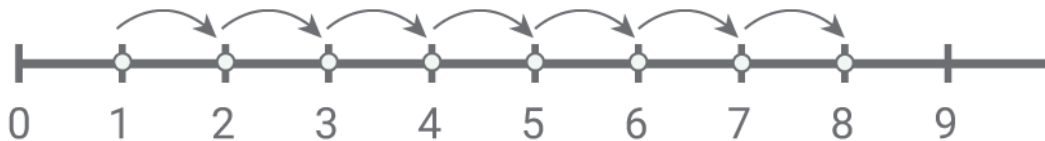
Answers:



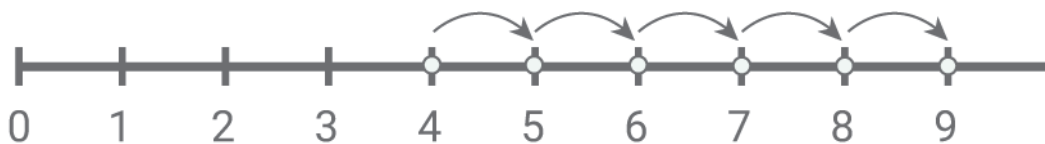
$$2 + 5 = \boxed{7}$$



$$3 + 3 = \boxed{6}$$



$$1 + 7 = \boxed{8}$$



$$4 + 5 = \boxed{9}$$