



Adding & subtracting by counting 1s and 2s

Math Worksheet


Count the circles. Write the numbers. Find the sum or difference.



+




$$\underline{\quad} + \underline{\quad} = \underline{\quad}$$



-




$$\underline{\quad} - \underline{\quad} = \underline{\quad}$$



+




$$\underline{\quad} + \underline{\quad} = \underline{\quad}$$




-



$$\underline{\quad} - \underline{\quad} = \underline{\quad}$$



+




$$\underline{\quad} + \underline{\quad} = \underline{\quad}$$


Adding & subtracting by counting 1s and 2s

Math Worksheet


Count the circles. Write the numbers. Find the sum or difference.



+




$$3 + 2 = 5$$



-




$$9 - 1 = 8$$



+




$$5 + 1 = 6$$




-



$$4 - 2 = 2$$



+



$$8 + 2 = 10$$