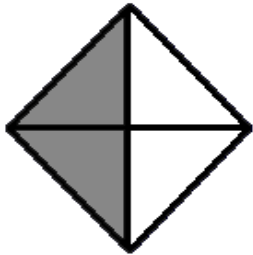
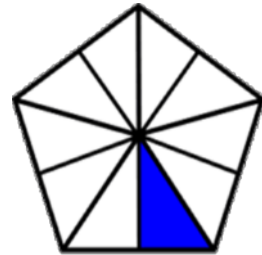


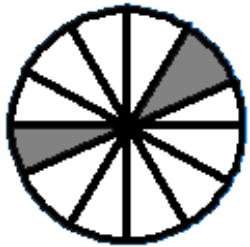
# Writing fractions

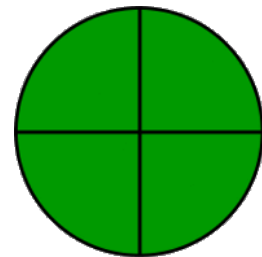
## Fractions Worksheet

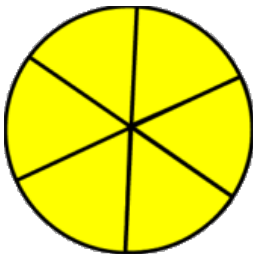
Write the fraction of the shape that is filled in.

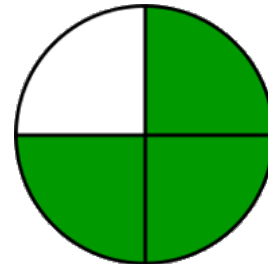


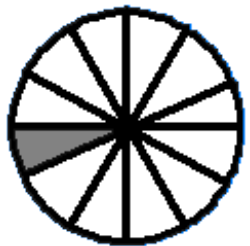
$$\frac{\square}{\square}$$


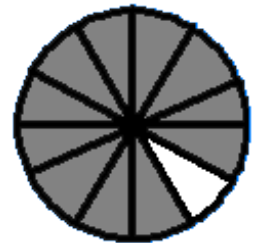
$$\frac{\square}{\square}$$


$$\frac{\square}{\square}$$


$$\frac{\square}{\square}$$


$$\frac{\square}{\square}$$


$$\frac{\square}{\square}$$


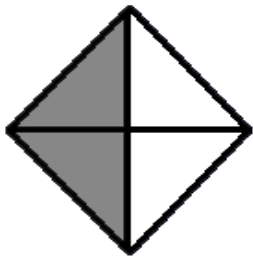
$$\frac{\square}{\square}$$


$$\frac{\square}{\square}$$

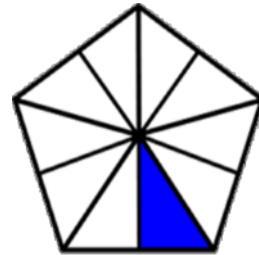
# Writing fractions

## Fractions Worksheet

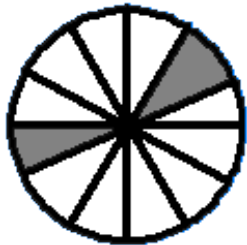
Write the fraction of the shape that is filled in.



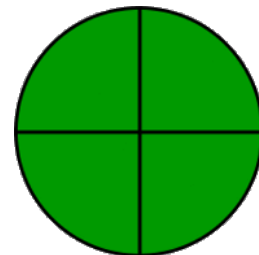
$$\frac{2}{4}$$



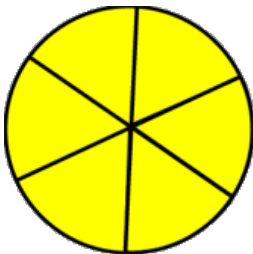
$$\frac{1}{10}$$



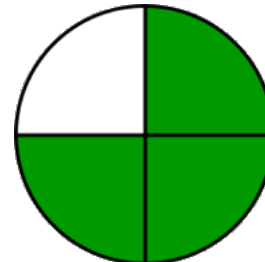
$$\frac{2}{12}$$



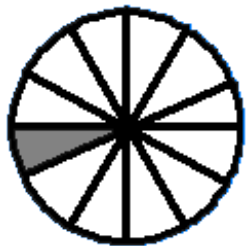
$$\frac{4}{4}$$



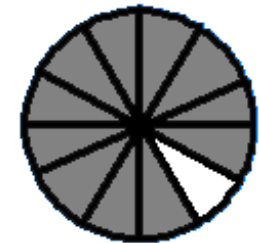
$$\frac{6}{6}$$



$$\frac{3}{4}$$



$$\frac{1}{12}$$



$$\frac{11}{12}$$