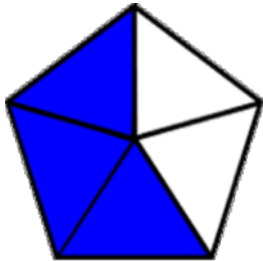
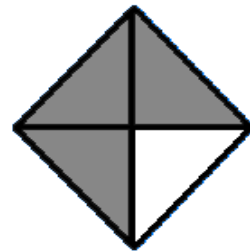


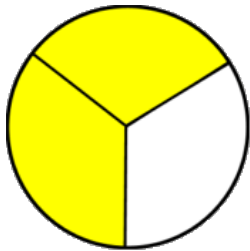
Writing fractions

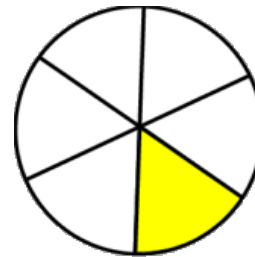
Fractions Worksheet

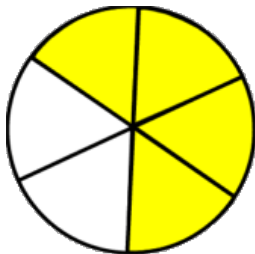
Write the fraction of the shape that is filled in.

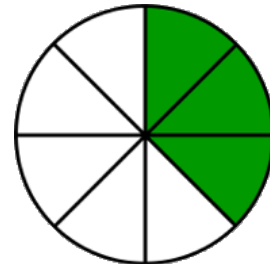


$$\frac{\boxed{3}}{\boxed{}}$$


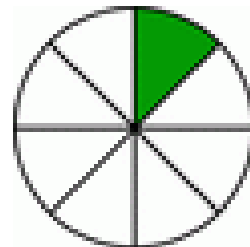
$$\frac{\boxed{}}{\boxed{}}$$


$$\frac{\boxed{}}{\boxed{3}}$$


$$\frac{\boxed{}}{\boxed{}}$$


$$\frac{\boxed{}}{\boxed{}}$$


$$\frac{\boxed{}}{\boxed{}}$$

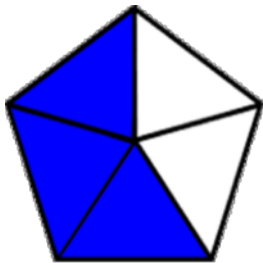

$$\frac{\boxed{}}{\boxed{}}$$


$$\frac{\boxed{}}{\boxed{}}$$

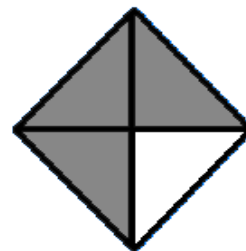
Writing fractions

Fractions Worksheet

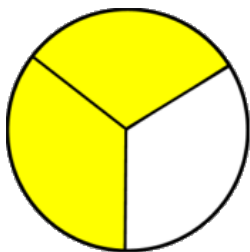
Write the fraction of the shape that is filled in.



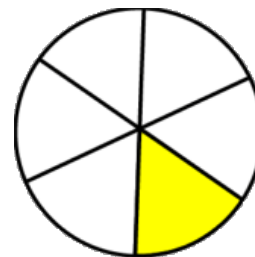
$$\frac{\boxed{3}}{\boxed{5}}$$



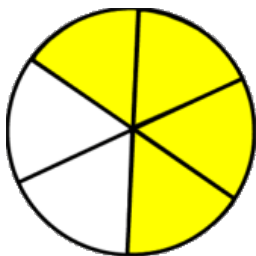
$$\frac{\boxed{3}}{\boxed{4}}$$



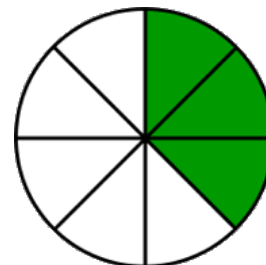
$$\frac{\boxed{2}}{\boxed{3}}$$



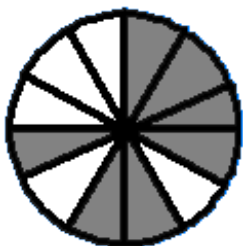
$$\frac{\boxed{1}}{\boxed{6}}$$



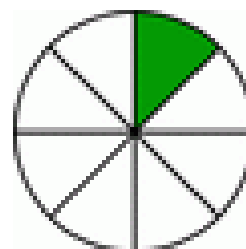
$$\frac{\boxed{4}}{\boxed{6}}$$



$$\frac{\boxed{3}}{\boxed{8}}$$



$$\frac{\boxed{7}}{\boxed{12}}$$



$$\frac{\boxed{1}}{\boxed{8}}$$