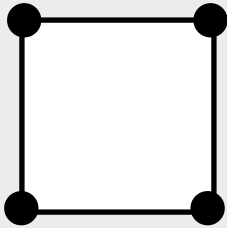


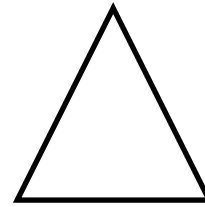
Corners

Draw a ● on each corner.

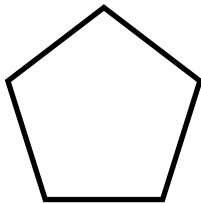
How many corners does the shape have?



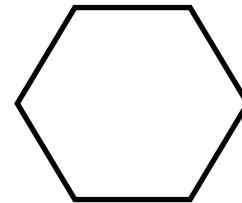
4 corners



 corners




 corners



 corners



 corners



 corners