


Counting One, Two, and Five-Cent Coins

 <p>This coin is worth 1 cent (euro cent). We write 1 c.</p>	 <p>This coin is worth two cents. We write 2 c.</p>	 <p>This coin is worth five cents = 5 c.</p>
---	--	---










In the exercises we use small pictures of these coins. Can you tell which is which?



Do not confuse these coins! They are all copper-coloured. The five-cent coin is the largest of these three, and the two-cent coin is larger than the one-cent coin. To be sure, look at the number written on them.

<p>Count up →</p>  <p>5 10 12 13 14 15</p>	<p>To find the total cent-value, add the cent-values. It's called counting up.</p> <p>Start counting with the coins of the largest value. The total on the right is 15 cents.</p>
--	--

1. Count and write the total amount in cents.

 <p>a. _____ c</p>	 <p>b. _____ c</p>	 <p>c. _____ c</p>
 <p>d. _____ c</p>	 <p>e. _____ c</p>	 <p>f. _____ c</p>
 <p>g. _____ c</p>	 <p>h. _____ c</p>	 <p>i. _____ c</p>