



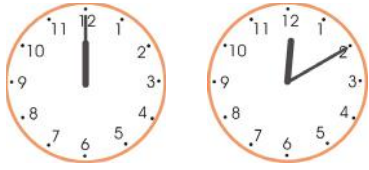

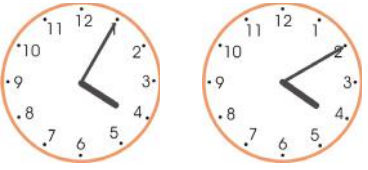
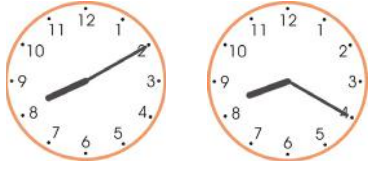

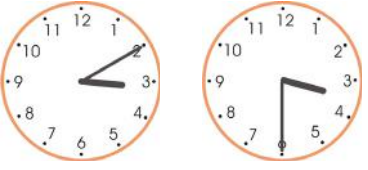


# How Many Minutes Pass?


1. How many minutes does the minute hand “cover,” or “pass through,” on the clock? Count by fives. Also, show the time passing using your practice clock.

 <p><b>a.</b> From 10:00 till 10:15</p> <p>_____ minutes</p>	 <p><b>b.</b> From 1:20 till 1:35</p> <p>_____ minutes</p>	 <p><b>c.</b> From 5:50 till 6:10</p> <p>_____ minutes</p>	 <p><b>d.</b> From 2:05 till 2:40</p> <p>_____ minutes</p>
---	---	--	---


2. Make your practice clock show the starting time. Then, move the minute hand till the ending time. How many minutes pass? Count by fives.


<p>from to</p>  <p><b>a.</b> _____ minutes</p>	<p>from to</p>  <p><b>b.</b> _____ minutes</p>	<p>from to</p>  <p><b>c.</b> _____ minutes</p>
<p>from to</p>  <p><b>d.</b> _____ minutes</p>	<p>from to</p>  <p><b>e.</b> _____ minutes</p>	<p>from to</p>  <p><b>f.</b> _____ minutes</p>


3. The clock shows the time now. Write the later times. Use your practice clock to help, or imagine the minute hand moving ahead.


	<p>• 5 minutes later _____ : _____</p>	<p>• 20 minutes later _____ : _____</p>
	<p>• 10 minutes later _____ : _____</p>	<p>• 25 minutes later _____ : _____</p>

4. The class ends at 1:00. How many minutes of class are left at these times?




from	to
	1:00
<b>a.</b> _____ minutes	

from	to
	1:00
<b>b.</b> _____ minutes	



from	to
	1:00
<b>c.</b> _____ minutes	

from	to
	1:00
<b>d.</b> _____ minutes	

5. The clock shows the time now. Write the later times. Use your practice clock to help, or imagine the minute hand moving ahead.

<p><b>NOW:</b></p>  <p><b>a.</b></p>	<ul style="list-style-type: none"> <li>• 5 minutes later _____ : _____</li> <li>• 10 minutes later _____ : _____</li> </ul>	<ul style="list-style-type: none"> <li>• 20 minutes later _____ : _____</li> <li>• 35 minutes later _____ : _____</li> </ul>
<p><b>NOW:</b></p>  <p><b>b.</b></p>	<ul style="list-style-type: none"> <li>• 10 minutes later _____ : _____</li> <li>• 30 minutes later _____ : _____</li> </ul>	<ul style="list-style-type: none"> <li>• 35 minutes later _____ : _____</li> <li>• 45 minutes later _____ : _____</li> </ul>
<p><b>NOW:</b></p>  <p><b>c.</b></p>	<ul style="list-style-type: none"> <li>• 10 minutes later _____ : _____</li> <li>• 20 minutes later _____ : _____</li> </ul>	<ul style="list-style-type: none"> <li>• 30 minutes later _____ : _____</li> <li>• 45 minutes later _____ : _____</li> </ul>

6. How many minutes till 2:30? Till 8:00? Use your practice clock to help.

<p><b>a.</b></p> <p>It is 1:50. → _____ minutes till</p> <p>It is 1:55. → _____ minutes till</p> <p>It is 2:10. → _____ minutes till</p> <p>It is 2:25. → _____ minutes till</p>	 <p><b>2:30</b></p>	<p><b>b.</b></p> <p>It is 7:20. → _____ minutes till</p> <p>It is 7:35. → _____ minutes till</p> <p>It is 7:45. → _____ minutes till</p> <p>It is 7:50. → _____ minutes till</p>	 <p><b>8:00</b></p>
--	--	--	--