







Pounds, Part 2

Here are the coins and bills with whole-pound amounts. (Coin images by the Royal Mint, 2015.)

 <p>£1</p>	 <p>£2</p>	 <p>£5</p>	 <p>£10</p>
<p>Write the “£” symbol in front of pound amounts.</p> <p>Write first the pounds, then a decimal point, and then the pence. Here you can also see the £20 and £50 bills.</p>	 <p>\$21.50</p>	 <p>\$52.05</p>	

1. How much money is there? Write the amount in pounds.

 <p>a. £ _____</p>	 <p>b. £ _____</p>
 <p>c. £ _____</p>	 <p>d. £ _____</p>
 <p>e. £ _____</p>	 <p>f. £ _____</p>