


# Counting 1p, 2p, and 5p Coins










 <p>This coin is one 1 penny or 1p.</p> <p>The Royal Mint (2015)</p>	 <p>This coin is 2 pence or 2p.</p> <p>The Royal Mint (2015)</p>	 <p>This coin is 5 pence or 5p.</p> <p>The Royal Mint (2015)</p>
---	---	---

In the exercises we use small pictures of these coins. The 1p and 2p coins are bronze. The 1p is bigger than the 5p coin. The 5p coin is silver, and the 2p coin is the largest.



 <p>Count up → 5p 10p 12p 13p 14p 15p</p>	<p>To find the total value, add all the pence. It's called counting up. Start counting with the coins of the largest value.</p> <p>The total on the left is 15p.</p>
---	--

1. Count and write the total amount in pence.

<p>a.</p>  <p>_____ p</p>	<p>b.</p>  <p>_____ p</p>	<p>c.</p>  <p>_____ p</p>
<p>d.</p>  <p>_____ p</p>	<p>e.</p>  <p>_____ p</p>	<p>f.</p>  <p>_____ p</p>
<p>g.</p>  <p>_____ p</p>	<p>h.</p>  <p>_____ p</p>	<p>i.</p>  <p>_____ p</p>