

Five and Ten-Cent Coins



This is a five-cent coin.
It can be written "5c".



This is a ten-cent coin.
It can be written "10c".

In the exercises we use small pictures of these coins. The 5-c coin is the smallest, and the 10-c coin is largest. They are both silver coloured.













Count up →



To find the total value, add the cent values. It's called **counting up**. Start counting with the coins of the largest value.

The total on the left is **40 cents**.

1. Count and write the total amount in cents.

<p>a. </p> <p>_____ cents</p>	<p>b. </p> <p>_____ cents</p>	<p>c. </p> <p>_____ cents</p>
<p>d. </p> <p>_____ cents</p>	<p>e. </p> <p>_____ cents</p>	<p>f. </p> <p>_____ cents</p>
<p>g. </p> <p>_____ cents</p>	<p>h. </p> <p>_____ cents</p>	<p>i. </p> <p>_____ cents</p>
<p>j. </p> <p>_____ cents</p>		