








Sums with 6

1. Here are some different ways to group six hippos into two groups.
Write the addition sentences.

 _____ + _____ = _____	 _____ + _____ = _____
 _____ + _____ = _____	 _____ + _____ = _____
 _____ + _____ = _____	 _____ + _____ = _____
 _____ + _____ = _____	

2. Play “6 Out” *and/or* “Some Went Hiding” with 6 objects (see the introduction).

3. **Drill.** Don't write the answers but just solve them in your head.

$1 + \square = 6$

$4 + \square = 6$

$\square + 2 = 6$

$\square + 3 = 6$

$2 + \square = 6$

$3 + \square = 6$

$\square + 0 = 6$

$\square + 1 = 6$

$6 + \square = 6$

$5 + \square = 6$

$\square + 4 = 6$

$\square + 5 = 6$

4. Add the numbers and write the total on the line.

a. $1 + 5 = \underline{\hspace{2cm}}$

b. $2 + 3 = \underline{\hspace{2cm}}$

c. $4 + 2 = \underline{\hspace{2cm}}$