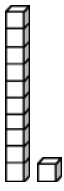
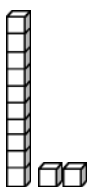
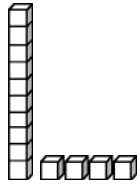
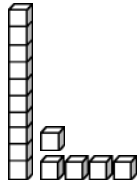
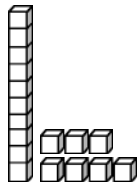
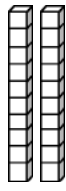
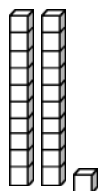
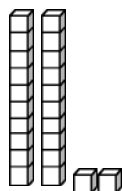
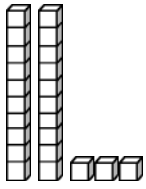


Building Numbers 11-40

1. Fill in the table. Think of the “+” sign as “and”: 10 + 3 means 10 *and* 3.

<p>a. <u>eleven</u></p>  $\begin{array}{r} \underline{10} + \underline{1} \\ \text{tens} \quad \text{ones} \\ \boxed{1} \quad \boxed{1} \end{array}$	<p>b. _____</p>  $\begin{array}{r} \underline{\quad} + \underline{\quad} \\ \text{tens} \quad \text{ones} \\ \boxed{\quad} \quad \boxed{\quad} \end{array}$
<p>c. _____</p>  $\begin{array}{r} \underline{\quad} + \underline{\quad} \\ \text{tens} \quad \text{ones} \\ \boxed{\quad} \quad \boxed{\quad} \end{array}$	<p>d. _____</p>  $\begin{array}{r} \underline{\quad} + \underline{\quad} \\ \text{tens} \quad \text{ones} \\ \boxed{\quad} \quad \boxed{\quad} \end{array}$
<p>e. _____</p>  $\begin{array}{r} \underline{\quad} + \underline{\quad} \\ \text{tens} \quad \text{ones} \\ \boxed{\quad} \quad \boxed{\quad} \end{array}$	<p>f. <u>Twenty</u></p>  $\begin{array}{r} 20 + \underline{0} \\ \text{tens} \quad \text{ones} \\ \boxed{\quad} \quad \boxed{\quad} \end{array}$
<p>g. <u>Twenty-one</u></p>  $\begin{array}{r} 20 + \underline{\quad} \\ \text{tens} \quad \text{ones} \\ \boxed{\quad} \quad \boxed{\quad} \end{array}$	<p>h. _____</p>  $\begin{array}{r} 20 + \underline{\quad} \\ \text{tens} \quad \text{ones} \\ \boxed{\quad} \quad \boxed{\quad} \end{array}$

i. _____

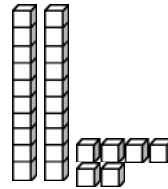


_____ + _____

tens ones

--	--

j. _____

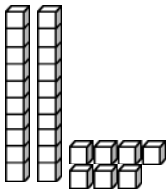


_____ + _____

tens ones

--	--

k. _____

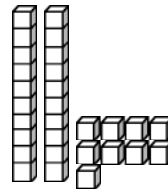


_____ + _____

tens ones

--	--

l. _____

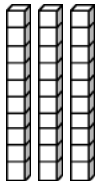


_____ + _____

tens ones

--	--

m. _____

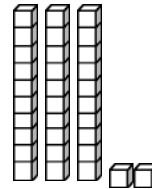


 30 + 0

tens ones

--	--

n. _____

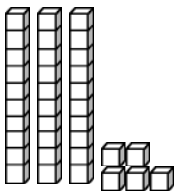


_____ + _____

tens ones

--	--

o. _____

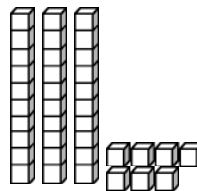


_____ + _____

tens ones

--	--

p. _____

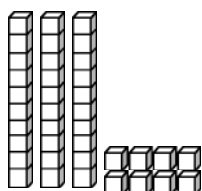


_____ + _____

tens ones

--	--

q. _____

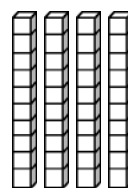


_____ + _____

tens ones

--	--

r. _____



_____ + _____

tens ones

--	--