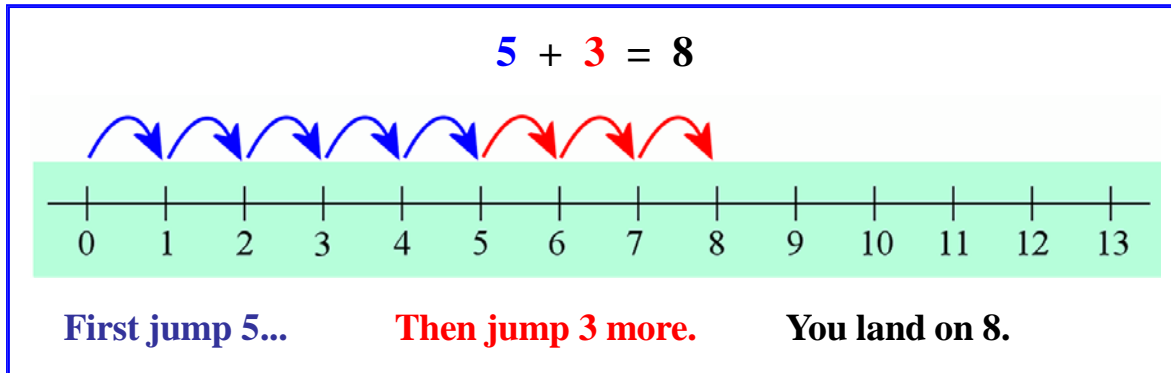
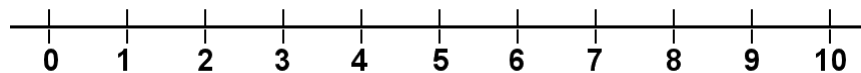


Adding on a Number Line

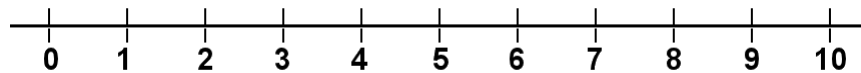


1. Draw the jumps to illustrate the addition and find the answer.
You can use a different color for each number when you draw the jumps.

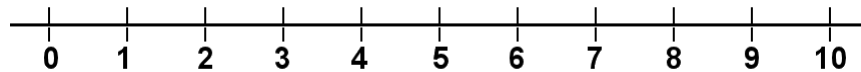
a. $5 + 2 =$ _____



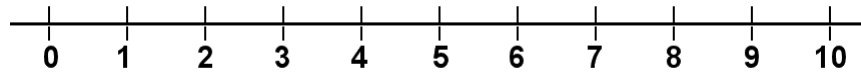
b. $4 + 1 =$ _____



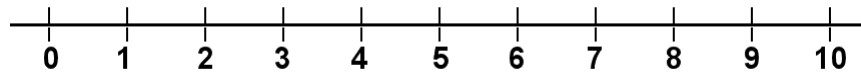
c. $6 + 3 =$ _____



d. $9 + 1 =$ _____



e. $7 + 3 =$ _____



f. $4 + 3 =$ _____

