

Number Rainbows—11 and 12

This is a number rainbow for 11. If two numbers are connected with an arc, they add up to 11. Use the number rainbow to help you with addition and subtraction facts!

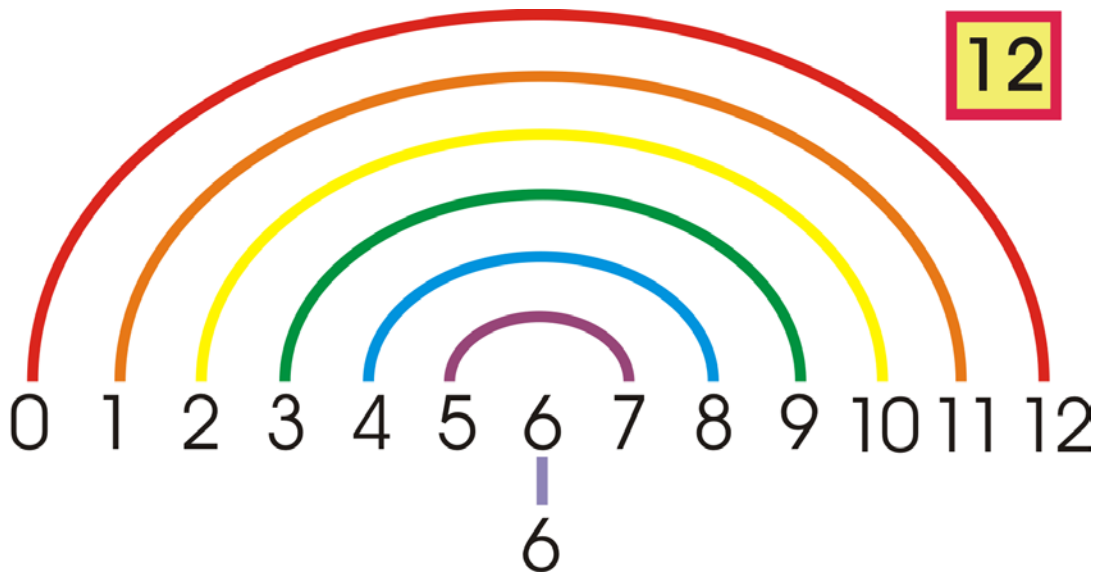
1. Practice subtraction from 11. Don't write the answers; just think them in your head.



$11 - 6 = \square$ $11 - 7 = \square$ $11 - 8 = \square$ $11 - 2 = \square$

$11 - 3 = \square$ $11 - 9 = \square$ $11 - 4 = \square$ $11 - 5 = \square$

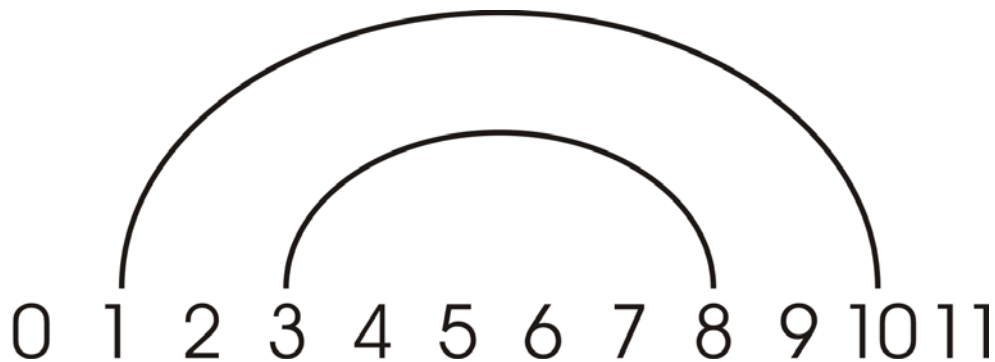
2. Similarly, practice subtraction from 12.



$12 - 5 = \square$ $12 - 7 = \square$ $12 - 10 = \square$ $12 - 6 = \square$

$12 - 9 = \square$ $12 - 4 = \square$ $12 - 3 = \square$ $12 - 8 = \square$

3. Fill and color the number rainbows. Don't look at the previous page!
Then practice the subtraction problems.



$11 - 4 = \square$

$11 - 2 = \square$

$11 - 3 = \square$

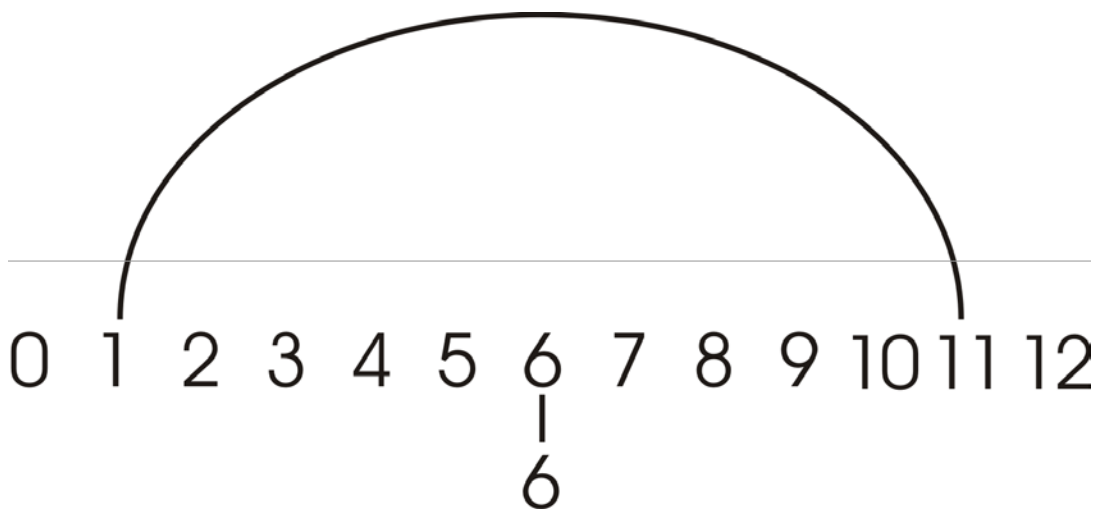
$11 - 9 = \square$

$11 - 8 = \square$

$11 - 5 = \square$

$11 - 6 = \square$

$11 - 7 = \square$



$12 - 8 = \square$

$12 - 3 = \square$

$12 - 4 = \square$

$12 - 9 = \square$

$12 - 6 = \square$

$12 - 10 = \square$

$12 - 7 = \square$

$12 - 5 = \square$

For more practice, make your own number rainbows and subtractions on blank paper!