

# Types of Triangles

---

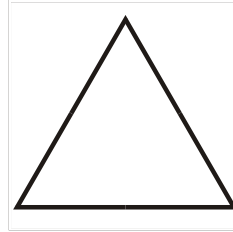
## Grade 6 Geometry Worksheet

Identify if the triangle is scalene, isosceles or equilateral.


1.



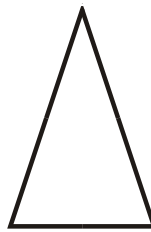
2.




3.



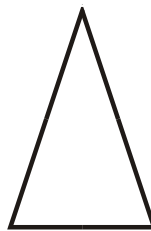
4.




5.



6.



7.



8.

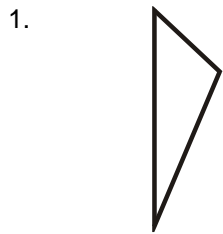


# Types of Triangles

---

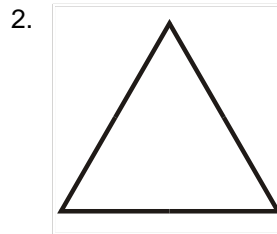
## Grade 6 Geometry Worksheet

Identify if the triangle is scalene, isosceles or equilateral.



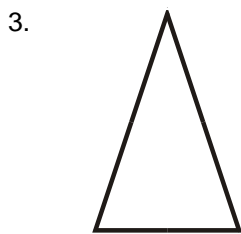
Scalene Triangle

---



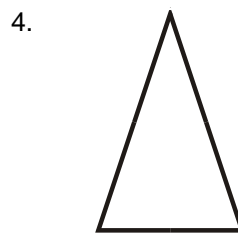
Equilateral Triangle

---



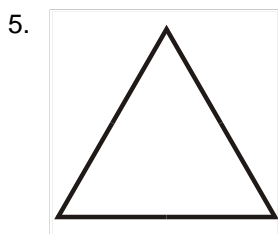
Isosceles Triangle

---



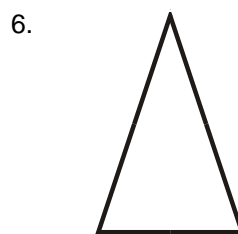
Isosceles Triangle

---



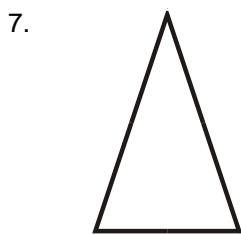
Equilateral Triangle

---



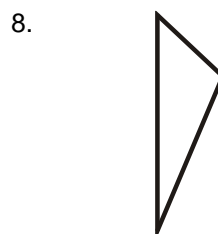
Isosceles Triangle

---



Isosceles Triangle

---



Scalene Triangle

---