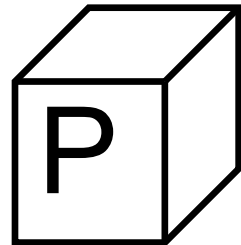
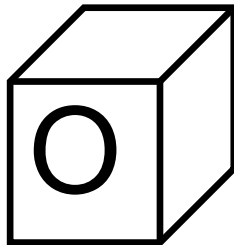


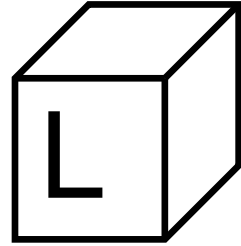


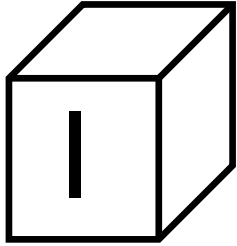


Identify relative positions: above and below

Kindergarten Position Worksheets: Above and Below

Look at the blocks and answer the questions:



1. Which block is above the “O” block? _____
2. Which block is below the “J” block? _____
3. Which block is above the “N” block? _____
4. Which block is below the “L” block? _____
5. Which block is above the “M” block? _____