

Adding & subtracting by counting 1s and 2s

Math Worksheet



Count the circles. Write the numbers. Find the sum or difference.


 $+$

 $\underline{\quad} + \underline{\quad} = \underline{\quad}$




 $-$

 $\underline{\quad} - \underline{\quad} = \underline{\quad}$


 $+$

 $\underline{\quad} + \underline{\quad} = \underline{\quad}$


 $-$


 $\underline{\quad} - \underline{\quad} = \underline{\quad}$


 $+$

 $\underline{\quad} + \underline{\quad} = \underline{\quad}$

Adding & subtracting by counting 1s and 2s

Math Worksheet


Count the circles. Write the numbers. Find the sum or difference.



+




$$5 + 1 = 6$$




-




$$5 - 1 = 4$$



+




$$4 + 2 = 6$$




-



$$4 - 2 = 2$$



+



$$3 + 2 = 5$$