


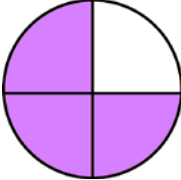

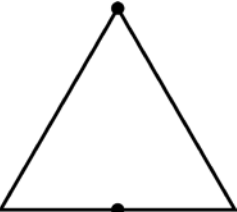

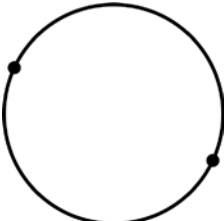



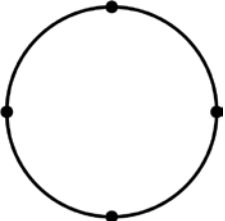

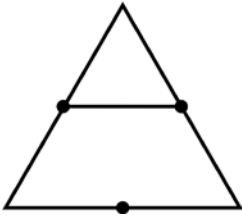
Halves and Quarters

<p>This square is divided into two parts that are the same. The parts are halves. Each part is <u>one half</u>.</p> 	<p>This circle is divided into four parts that are the same. The parts are called fourths or quarters. Each part is <u>one fourth</u> or <u>one quarter</u>.</p> 
<p>Here, one-half of the square is colored. The other half is white.</p> 	<p>Here, three-fourths of the circle are colored. One-fourth of it is white.</p> 

1. Divide these shapes into halves by drawing a straight line from dot to dot. Then color as you are asked to.

<p>a. </p> <p>Color one half.</p>	<p>b. </p> <p>Color two halves.</p>	<p>c. </p> <p>Color one half.</p>	<p>d. </p> <p>Color both halves, but different colors.</p>
--	---	--	--

2. Divide these shapes into fourths by drawing two straight lines from dot to dot. Then color as you are asked to.

<p>a. </p> <p>Color one fourth.</p>	<p>b. </p> <p>Color three fourths.</p>	<p>c. </p> <p>Color two fourths.</p>	<p>d. </p> <p>Color four fourths = the WHOLE triangle.</p>
--	---	--	---