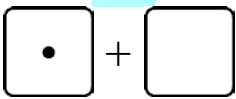
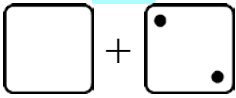
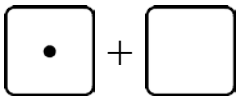
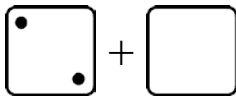
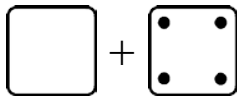
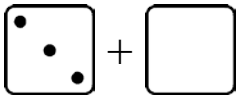
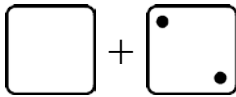
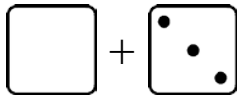
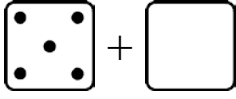
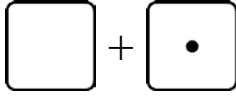
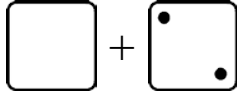


# Missing Items

<p>Something is missing from the addition. The TOTAL is not missing. The total is 5.</p> <p>How many are in the second group? That's what is missing!</p> <p>There should be a total of 5 dots. Draw 4 in the second die face.</p>	<p style="text-align: center;"><b>5</b></p>  <p style="text-align: center;">1 + _____</p>
<p>There should be a total of 4 dots. The second die face has two. There are none in the first die face, so you need to draw them.</p> <p>Read: "2 plus what number makes 4?" or, "2 and how many more makes 4?" or, "What number and 2 makes 4?"</p>	<p style="text-align: center;"><b>4</b></p>  <p style="text-align: center;">_____ + 2</p>

1. Draw more dots for the addition. Write the missing number. The total is on top.

<p style="text-align: center;"><b>3</b></p>  <p>a. 1 + _____</p>	<p style="text-align: center;"><b>3</b></p>  <p>b. 2 + _____</p>	<p style="text-align: center;"><b>5</b></p>  <p>c. _____ + 4</p>
<p style="text-align: center;"><b>5</b></p>  <p>d. 3 + _____</p>	<p style="text-align: center;"><b>5</b></p>  <p>e. _____ + 2</p>	<p style="text-align: center;"><b>4</b></p>  <p>f. _____ + 3</p>
<p style="text-align: center;"><b>5</b></p> 	<p style="text-align: center;"><b>4</b></p>  <p>h. _____ + 1</p>	<p style="text-align: center;"><b>4</b></p>  <p>i. _____ + 2</p>